

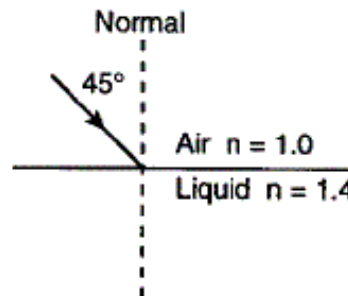
Name _____ # _____

Snell's Law HW

| | |
|---|-------------------|
| $n_1 \sin \theta_1 = n_2 \sin \theta_2$ | $n = \frac{c}{v}$ |
|---|-------------------|


1. A ray of monochromatic light ($f = 5.09 \times 10^{14}$ Hz) traveling in air is incident on an interface with a liquid ($n = 1.4$) at an angle of 45° .

- a) Find the angle of refraction _____ b) Draw the refracted ray c) and the reflected ray.

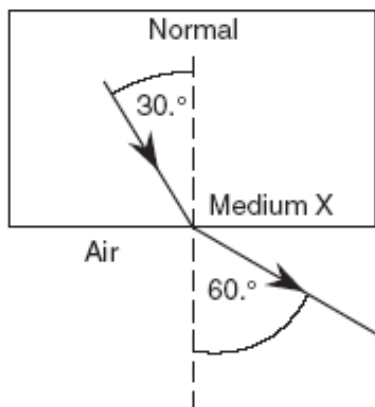


2. If the angle of incidence in air is 30° , what is the angle of refraction in crown glass?

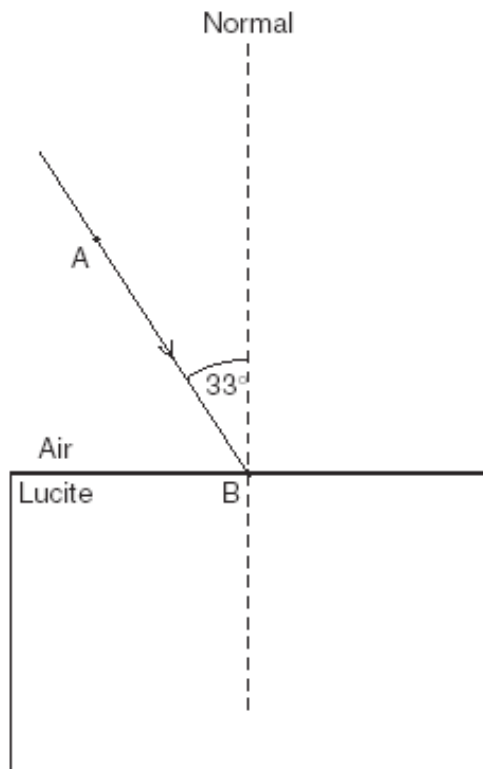
Draw the refraction diagram (be sure to also include the reflected beam)



3. The diagram below shows a ray of light passing from medium X into air. What is the absolute index of refraction of medium X?

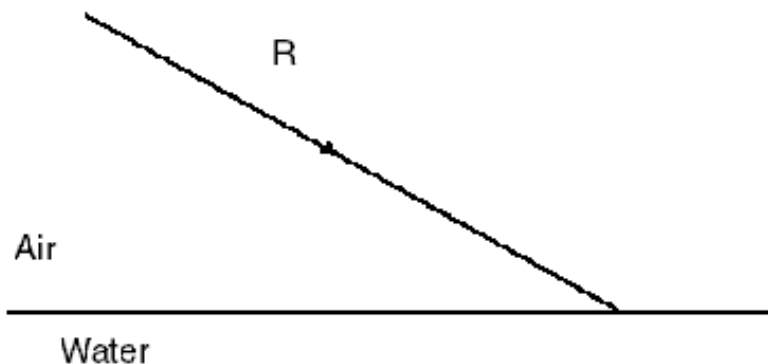


(Questions 4,5) A monochromatic beam of yellow light, AB , is incident upon a Lucite block in air at an angle of 33° . **Find the angle of refraction. Draw the refracted ray**

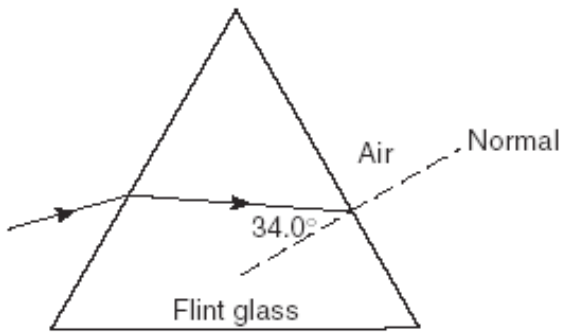


Base your answers to **questions 6 and 7** on the information and diagram below. In the diagram, a light ray, R , strikes the boundary of air and water.

- 6.** Using a protractor, determine the angle of incidence. (hint: Draw the normal first)
- 7.** Using a protractor and straightedge, find and draw the refracted ray on the diagram below



(8 - 10) The diagram below which shows a ray of monochromatic light ($f = 5.09 \times 10^{14}$ hertz) passing through a flint glass prism.



8. Calculate the angle of refraction (in degrees) of the light ray as it enters the air from the flint glass prism.

9. Using a protractor and a straightedge, construct the refracted light ray in the air on the diagram

10. What is the speed of the light ray in flint glass? (answer in scientific notation)